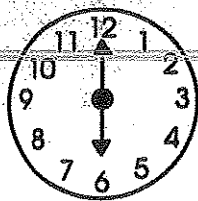




Escribe las horas de los relojes




\_\_\_\_\_



\_\_\_\_\_




\_\_\_\_\_




\_\_\_\_\_



\_\_\_\_\_




\_\_\_\_\_




\_\_\_\_\_


Escribe las horas de los relojes




\_\_\_\_\_



\_\_\_\_\_




\_\_\_\_\_




\_\_\_\_\_



\_\_\_\_\_



\_\_\_\_\_



\_\_\_\_\_

Nombre: \_\_\_\_\_ Sección: \_\_\_\_\_

Write what time it is in a complete sentence.

9:45 PM	
10:00 AM	
3:00 AM	
4:14 PM	
7:25 PM	
11:35 PM	
12:00 AM	
1:05 PM	
2:10 AM	
7:50 PM	
12:00 PM	
1:00 AM	
12:45 PM	
1:15 AM	
7:50 PM	
8:25 AM	
9:05 PM	
10:00 AM	
3:45 PM	
4:45 PM	
8:10 AM	
12:20 PM	
9:40 AM	
3:15 PM	
1:45 PM	
11:40 AM	
11:10 AM	
5:00 PM	